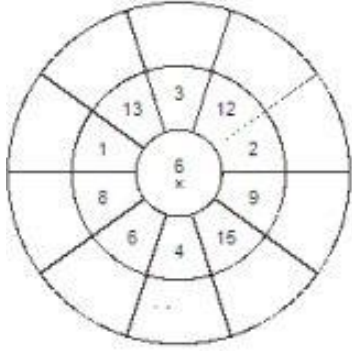
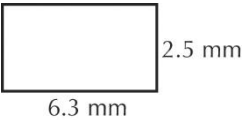
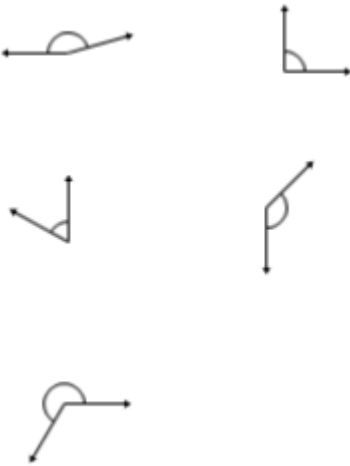


Name: _____

<p>1. Number Skills – no calculator</p> 11×6 9×5 12×3 $54 \div 9$ $48 \div 12$	<p>2. Subtraction</p> $\begin{array}{r} 6927 \\ - 3165 \\ \hline \end{array}$	<p>3. Multiplication</p> 
<p>4. Measurement - perimeter</p> 	<p>5. Measurement - calendar</p> <p>a) Which month is represented by the number 8?</p> <p>b) Which month has the least days?</p> <p>c) Which months are in Autumn?</p>	<p>6. Factors</p> <p>What are the factors of</p> <p>12</p> <p>42</p> <p>25</p>
<p>7. Statistics – stem and leaf</p> <p>Create a stem and leaf plot for the following data</p> <p>15, 12, 34, 56, 23, 34, 22, 18, 52</p> <p>What is the median?</p>	<p>8. Geometry - angles</p> <p>Name the type of angle shown</p> 	<p>9. Geometry - shapes</p> <p>a) Draw a trapezium</p> <p>b) Draw a kite</p>