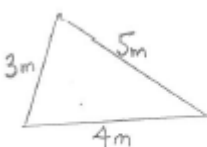
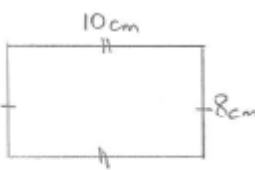

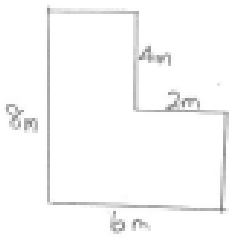


Name: \_\_\_\_\_

<p>1. Integers</p> $6 - 10$ $-3 - 5$ $-9 + 7$ $-10 + 4$	<p>2. Rounding</p> <p><b>Round to the nearest ten</b></p> <p>a) 38</p> <p>b) 251</p> <p>c) 4863</p> <p>d) 398</p>	<p>3. Substitution</p> <p>If <math>c = 10</math>, find</p> <p>a) <math>c + 7</math></p> <p>b) <math>3c</math></p> <p>c) <math>c^2</math></p>
<p>4. Factors</p> <p><b>List the factors of 25.</b></p>	<p>5. Multiplication</p> $\begin{array}{r} 438 \\ \times 24 \\ \hline \end{array}$	<p>6. Division</p> $5 \overline{) 485}$
<p>7. Perimeter</p>  	<p>8. Area</p>  	<p>9. Fractions</p> <p><b>Show the following fractions in a diagram</b></p> <p>a) <math>\frac{2}{3}</math></p> <p>b) <math>\frac{3}{5}</math></p>