
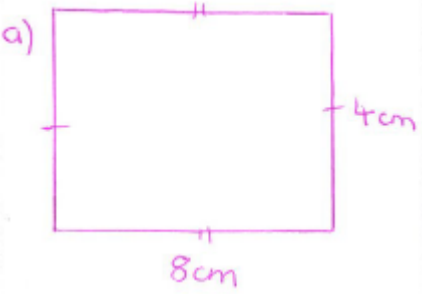
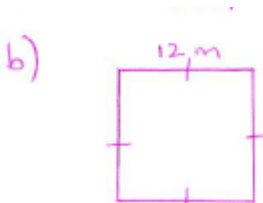


Name: _____

<p>1. Number Skills – no calculator</p> 7×7 9×7 10×6 8×100 $270 \div 10$	<p>2. Converting</p> <p>There are 1000 g in a kilogram.</p> <p>There are 1000 mL in a litre.</p> $1500g = \quad kg$ $3 L = \quad mL$ $5.6 kg = \quad g$ $5600 mL = \quad L$	<p>3. Addition</p> $\begin{array}{r} 6793 \\ + 8740 \\ \hline \end{array}$																																																							
<p>4. Measurement time</p> <p>What is the time shown?</p> 	<p>5. Multiplication</p> $\begin{array}{r} 348 \\ \times 13 \\ \hline \end{array}$	<p>6. Subtraction</p> $\begin{array}{r} 297 \\ - 139 \\ \hline \end{array}$																																																							
<p>7. Perimeter</p> <p>a)</p>  <p>b)</p> 	<p>8. Calendar Maths</p> <table border="1" style="margin-left: auto; margin-right: auto;"> <thead> <tr> <th colspan="7">April 2016</th> </tr> <tr> <th>W</th> <th>S</th> <th>M</th> <th>T</th> <th>W</th> <th>T</th> <th>F</th> <th>S</th> </tr> </thead> <tbody> <tr> <td>13</td> <td></td> <td></td> <td></td> <td></td> <td></td> <td>1</td> <td>2</td> </tr> <tr> <td>14</td> <td>3</td> <td>4</td> <td>5</td> <td>6</td> <td>7</td> <td>8</td> <td>9</td> </tr> <tr> <td>15</td> <td>10</td> <td>11</td> <td>12</td> <td>13</td> <td>14</td> <td>15</td> <td>16</td> </tr> <tr> <td>16</td> <td>17</td> <td>18</td> <td>19</td> <td>20</td> <td>21</td> <td>22</td> <td>23</td> </tr> <tr> <td>17</td> <td>24</td> <td>25</td> <td>26</td> <td>27</td> <td>28</td> <td>29</td> <td>30</td> </tr> </tbody> </table> <p>a) How many Sundays are in April?</p> <p>b) What day does April 16th fall on?</p> <p>c) April 30th is the end of which week for the year?</p>	April 2016							W	S	M	T	W	T	F	S	13						1	2	14	3	4	5	6	7	8	9	15	10	11	12	13	14	15	16	16	17	18	19	20	21	22	23	17	24	25	26	27	28	29	30	<p>9. Geometry – shapes</p> <p>Draw the following shapes</p> <p>a) Rectangle</p> <p>b) Right angled triangle</p> <p>c) Trapezium</p>
April 2016																																																									
W	S	M	T	W	T	F	S																																																		
13						1	2																																																		
14	3	4	5	6	7	8	9																																																		
15	10	11	12	13	14	15	16																																																		
16	17	18	19	20	21	22	23																																																		
17	24	25	26	27	28	29	30																																																		

